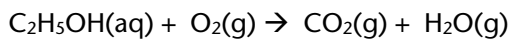
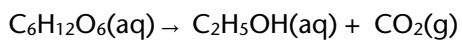
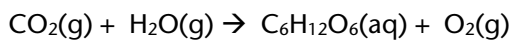
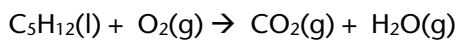




Bioethanol – afstemning af reaktioner

Baseret på siderne 118-123

Afstem processerne og giv dem et passende navn



Reaktionerne er af typen redoxreaktioner som gennemgås i Bind 2.